





Picture Problems Within 5


Count the pictures and solve each addition problem.





3 apples and 1 apple make _____ apples.



3 strawberries and 2 strawberries make _____ strawberries.





4 tomatoes and 1 tomato make _____ tomatoes.





1 carrot and 1 carrot make _____ carrots.


Picture Problems Within 5





3 apples and 1 apple make _____ apples.



3 strawberries and 2 strawberries make _____ strawberries.



4 tomatoes and 1 tomato make _____ tomatoes.



1 carrot and 1 carrot make _____ carrots.