

Base-ten Values to 100

Write each number in expanded form.

_____ + _____ + _____ = _____

_____ + _____ + _____ = _____

_____ + _____ + _____ = _____

_____ + _____ + _____ = _____

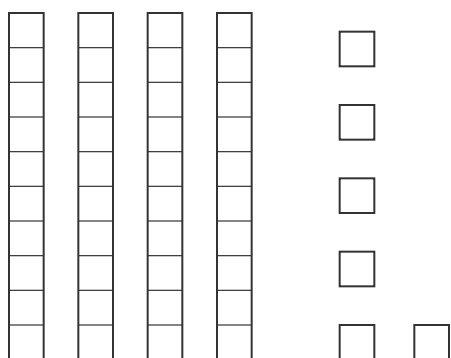
_____ + _____ + _____ = _____

_____ + _____ + _____ = _____

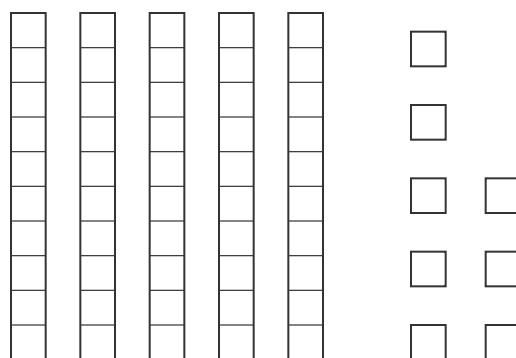


Base-ten Values to 100

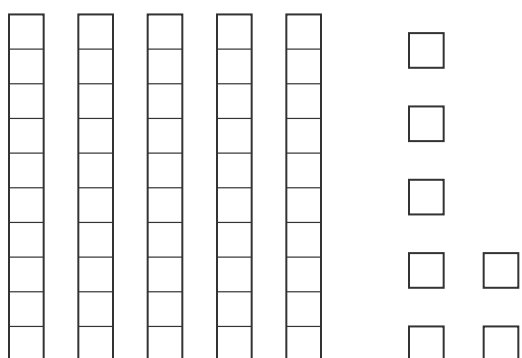
Write each number in expanded form.



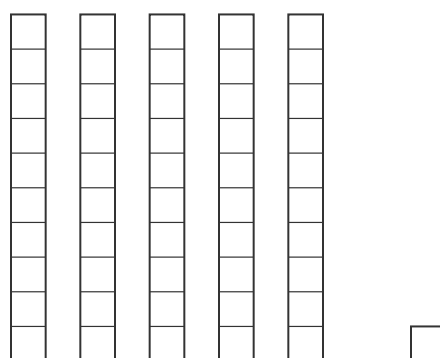
$$\underline{0} + \underline{40} + \underline{6} = \underline{46}$$



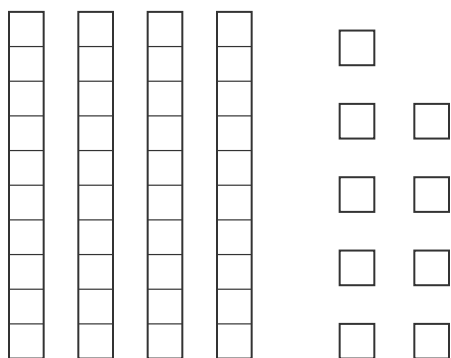
$$\underline{0} + \underline{50} + \underline{8} = \underline{58}$$



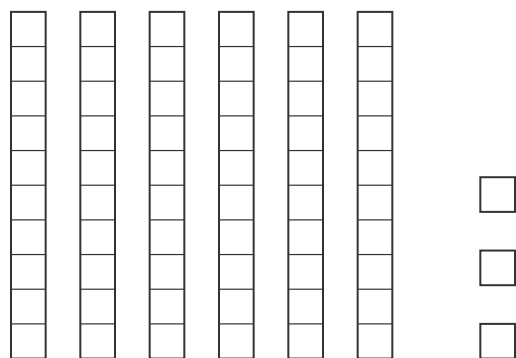
$$\underline{0} + \underline{50} + \underline{7} = \underline{57}$$



$$\underline{0} + \underline{50} + \underline{1} = \underline{51}$$



$$\underline{0} + \underline{40} + \underline{9} = \underline{49}$$



$$\underline{0} + \underline{60} + \underline{3} = \underline{63}$$