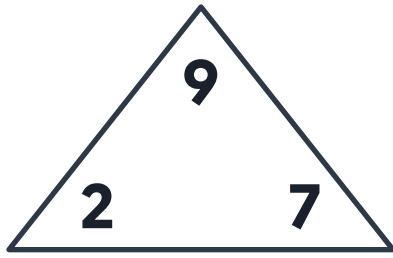
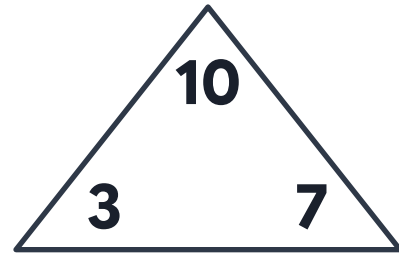


Fact Families Add & Subtract

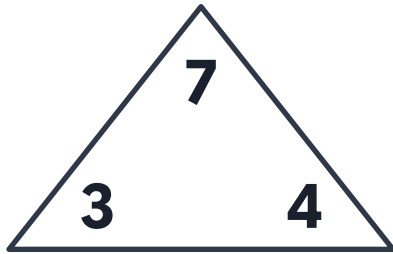
Complete each fact family.



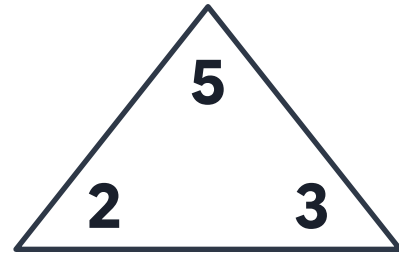
$$\begin{array}{r} _ _ _ + _ _ _ = _ _ _ \\ _ _ _ + _ _ _ = _ _ _ \\ _ _ _ - _ _ _ = _ _ _ \\ _ _ _ - _ _ _ = _ _ _ \end{array}$$



$$\begin{array}{r} _ _ _ + _ _ _ = _ _ _ \\ _ _ _ + _ _ _ = _ _ _ \\ _ _ _ - _ _ _ = _ _ _ \\ _ _ _ - _ _ _ = _ _ _ \end{array}$$

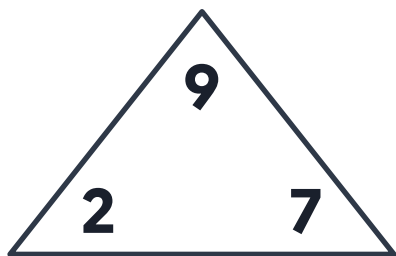


$$\begin{array}{r} _ _ _ + _ _ _ = _ _ _ \\ _ _ _ + _ _ _ = _ _ _ \\ _ _ _ - _ _ _ = _ _ _ \\ _ _ _ - _ _ _ = _ _ _ \end{array}$$



$$\begin{array}{r} _ _ _ + _ _ _ = _ _ _ \\ _ _ _ + _ _ _ = _ _ _ \\ _ _ _ - _ _ _ = _ _ _ \\ _ _ _ - _ _ _ = _ _ _ \end{array}$$

Fact Families Add & Subtract

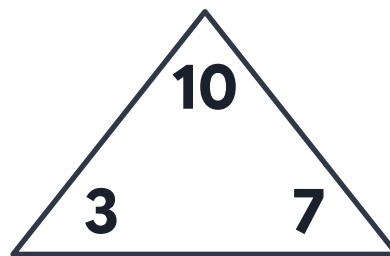


$$2 + 7 = 9$$

$$7 + 2 = 9$$

$$9 - 2 = 7$$

$$9 - 7 = 2$$

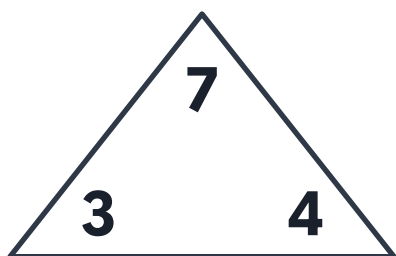


$$3 + 7 = 10$$

$$7 + 3 = 10$$

$$10 - 3 = 7$$

$$10 - 7 = 3$$

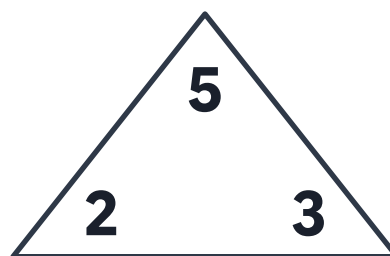


$$3 + 4 = 7$$

$$4 + 3 = 7$$

$$7 - 3 = 4$$

$$7 - 4 = 3$$



$$2 + 3 = 5$$

$$3 + 2 = 5$$

$$5 - 2 = 3$$

$$5 - 3 = 2$$