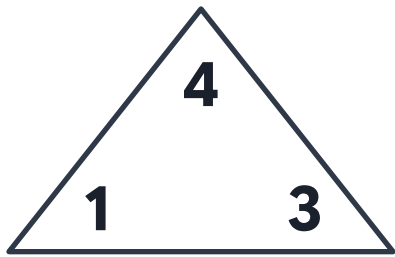


Fact Families Add & Subtract

Complete each fact family.

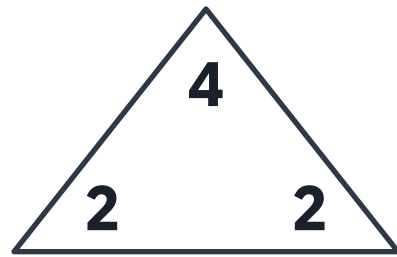


$$1 + \underline{\quad} = 4$$

$$\underline{\quad} + 1 = 4$$

$$4 - 1 = \underline{\quad}$$

$$\underline{\quad} - 3 = 1$$

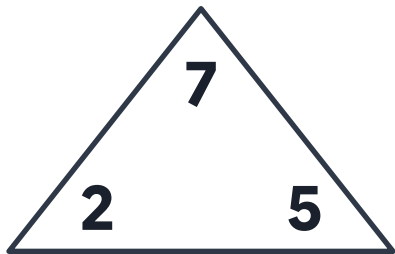


$$2 + 2 = \underline{\quad}$$

$$\underline{\quad} + 2 = 4$$

$$4 - \underline{\quad} = 2$$

$$4 - 2 = \underline{\quad}$$

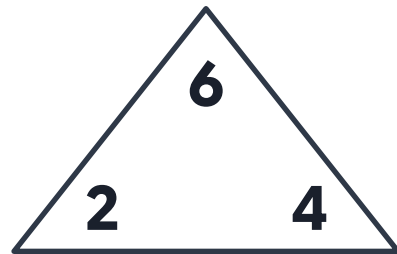


$$2 + \underline{\quad} = 7$$

$$\underline{\quad} + 2 = 7$$

$$7 - \underline{\quad} = 5$$

$$\underline{\quad} - 5 = 2$$



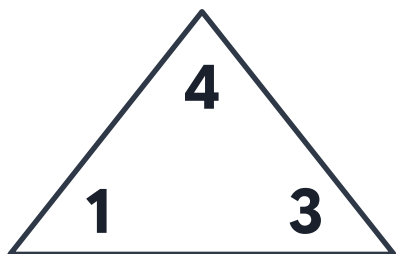
$$2 + \underline{\quad} = 6$$

$$4 + \underline{\quad} = 6$$

$$6 - \underline{\quad} = 4$$

$$6 - \underline{\quad} = 2$$

Fact Families Add & Subtract

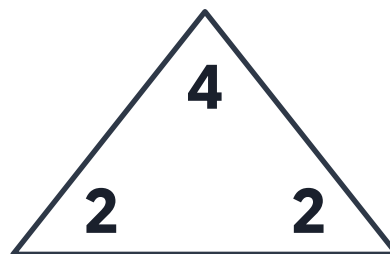


$$1 + 3 = 4$$

$$3 + 1 = 4$$

$$4 - 1 = 3$$

$$4 - 3 = 1$$

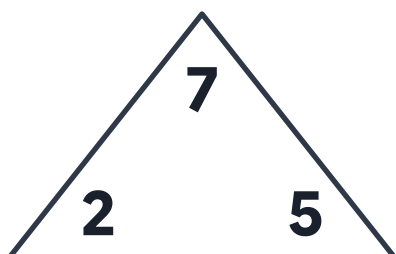


$$2 + 2 = 4$$

$$2 + 2 = 4$$

$$4 - 2 = 2$$

$$4 - 2 = 2$$

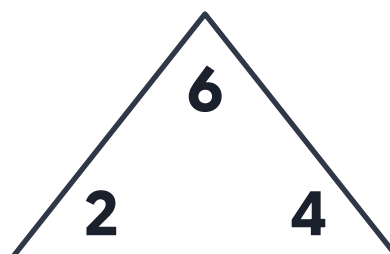


$$2 + 5 = 7$$

$$5 + 2 = 7$$

$$7 - 2 = 5$$

$$7 - 5 = 2$$



$$2 + 4 = 6$$

$$4 + 2 = 6$$

$$6 - 2 = 4$$

$$6 - 4 = 2$$