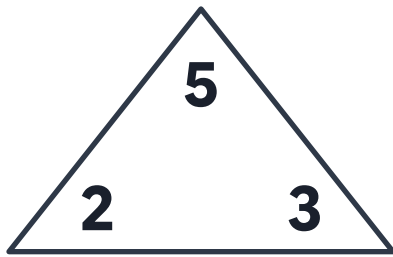


# Fact Families Add & Subtract

Complete each fact family.

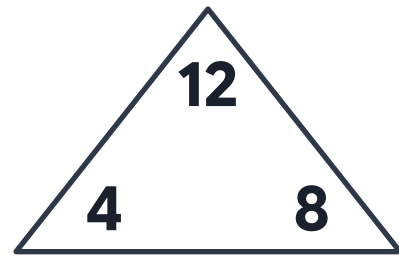


$$\underline{\quad} + 3 = 5$$

$$3 + 2 = \underline{\quad}$$

$$5 - \underline{\quad} = 3$$

$$\underline{\quad} - 3 = 2$$

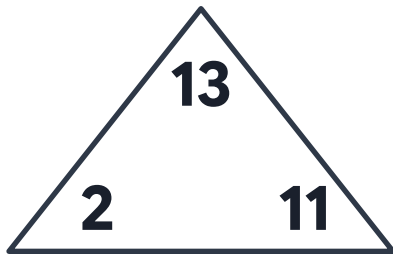


$$\underline{\quad} + 8 = 12$$

$$8 + \underline{\quad} = 12$$

$$12 - \underline{\quad} = 8$$

$$12 - \underline{\quad} = 4$$

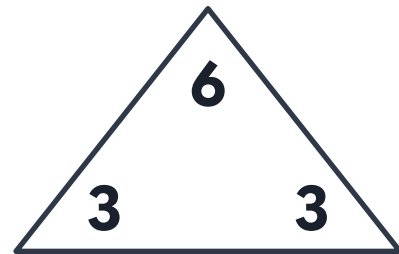


$$\underline{\quad} + 11 = 13$$

$$\underline{\quad} + 2 = 13$$

$$\underline{\quad} - 2 = 11$$

$$13 - 11 = \underline{\quad}$$



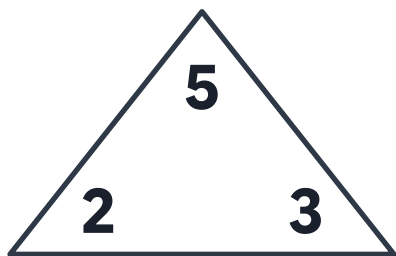
$$\underline{\quad} + 3 = 6$$

$$\underline{\quad} + 3 = 6$$

$$\underline{\quad} - 3 = 3$$

$$6 - \underline{\quad} = 3$$

# Fact Families Add & Subtract

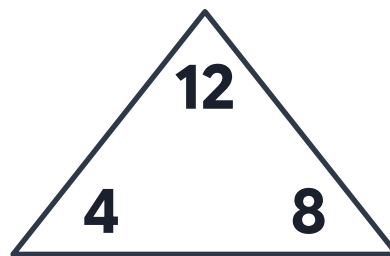


$$2 + 3 = 5$$

$$3 + 2 = 5$$

$$5 - 2 = 3$$

$$5 - 3 = 2$$

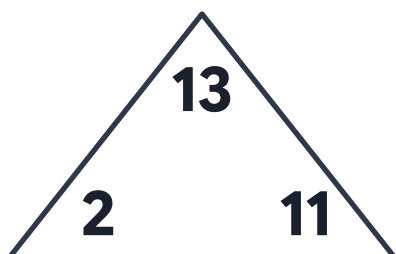


$$4 + 8 = 12$$

$$8 + 4 = 12$$

$$12 - 4 = 8$$

$$12 - 8 = 4$$

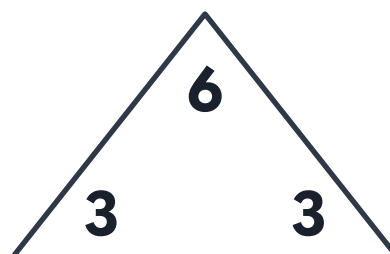


$$2 + 11 = 13$$

$$11 + 2 = 13$$

$$13 - 2 = 11$$

$$13 - 11 = 2$$



$$3 + 3 = 6$$

$$3 + 3 = 6$$

$$6 - 3 = 3$$

$$6 - 3 = 3$$