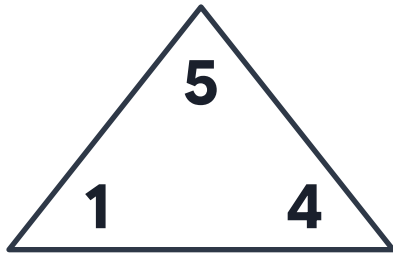
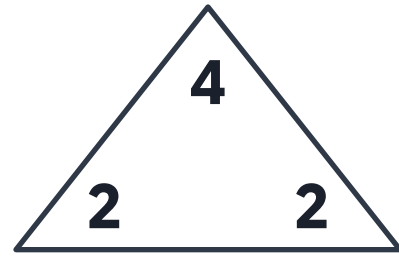


Fact Families Add & Subtract

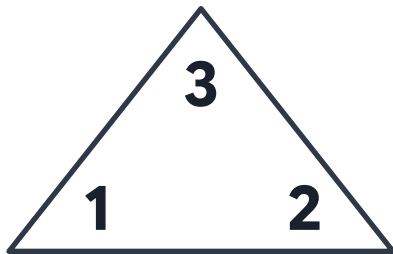
Complete each fact family.



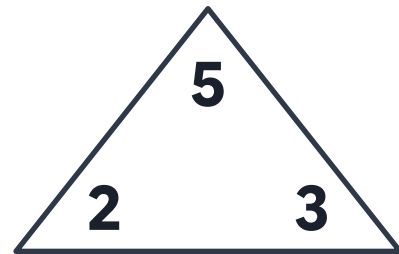
$$\begin{array}{r} _ _ _ + _ _ _ = _ _ _ \\ _ _ _ + _ _ _ = _ _ _ \\ _ _ _ - _ _ _ = _ _ _ \\ _ _ _ - _ _ _ = _ _ _ \end{array}$$



$$\begin{array}{r} _ _ _ + _ _ _ = _ _ _ \\ _ _ _ + _ _ _ = _ _ _ \\ _ _ _ - _ _ _ = _ _ _ \\ _ _ _ - _ _ _ = _ _ _ \end{array}$$



$$\begin{array}{r} _ _ _ + _ _ _ = _ _ _ \\ _ _ _ + _ _ _ = _ _ _ \\ _ _ _ - _ _ _ = _ _ _ \\ _ _ _ - _ _ _ = _ _ _ \end{array}$$



$$\begin{array}{r} _ _ _ + _ _ _ = _ _ _ \\ _ _ _ + _ _ _ = _ _ _ \\ _ _ _ - _ _ _ = _ _ _ \\ _ _ _ - _ _ _ = _ _ _ \end{array}$$

Fact Families Add & Subtract

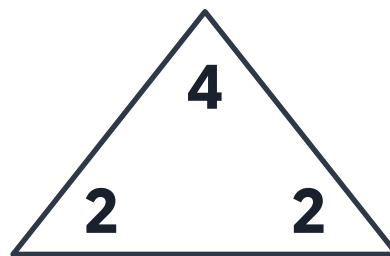


$$1 + 4 = 5$$

$$4 + 1 = 5$$

$$5 - 1 = 4$$

$$5 - 4 = 1$$

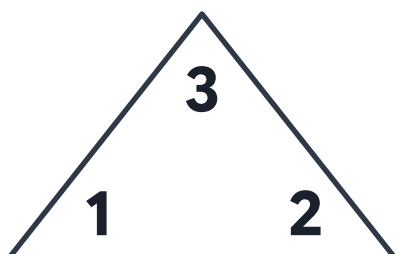


$$2 + 2 = 4$$

$$2 + 2 = 4$$

$$4 - 2 = 2$$

$$4 - 2 = 2$$

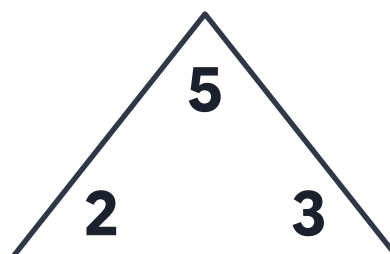


$$1 + 2 = 3$$

$$2 + 1 = 3$$

$$3 - 1 = 2$$

$$3 - 2 = 1$$



$$2 + 3 = 5$$

$$3 + 2 = 5$$

$$5 - 2 = 3$$

$$5 - 3 = 2$$