


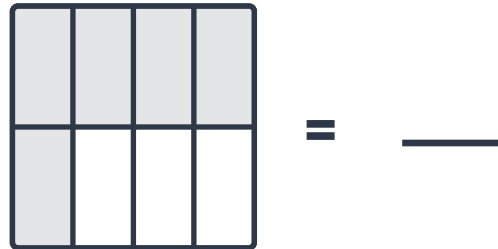
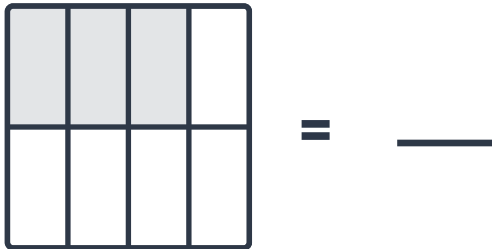
# Basic Fractions

Shade the fraction shown.

$$\frac{4}{5}$$




$$\frac{2}{3}$$





# Basic Fractions

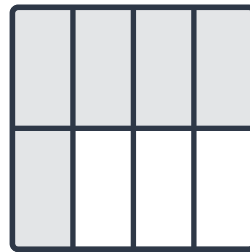
$$\frac{4}{5}$$



$$\frac{2}{3}$$



$$= \frac{3}{8}$$



$$= \frac{5}{8}$$



$$= \frac{3}{5}$$



$$= \frac{1}{5}$$