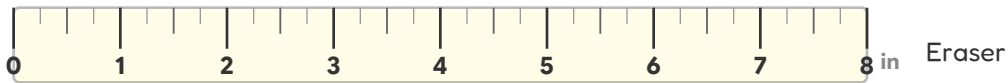


# Compare Lengths (Inches)

Measure each object and write the answer.

Which is longer? Circle the longer object.



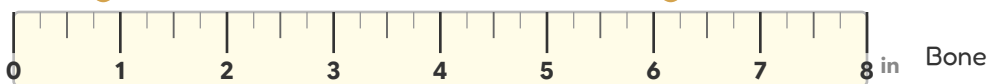
The \_\_\_\_\_ is longer.

Which is longer? Circle the longer object.



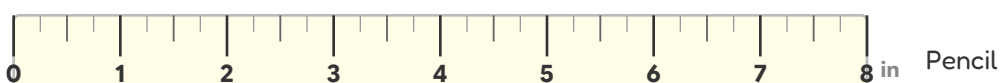
The \_\_\_\_\_ is longer.

Which is longer? Circle the longer object.



The \_\_\_\_\_ is longer.

Which is longer? Circle the longer object.

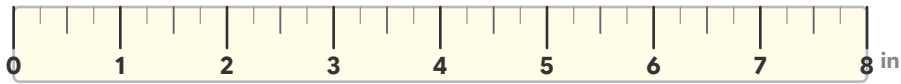


The \_\_\_\_\_ is longer.

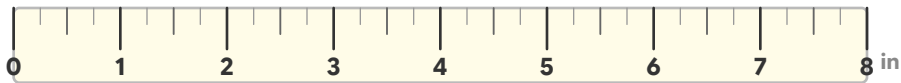


# Compare Lengths (Inches)

Which is longer? Circle the longer object.



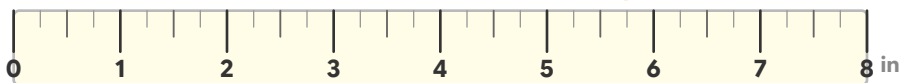
Worm



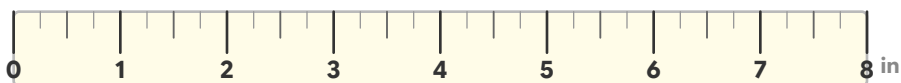
Eraser

The eraser is longer.

Which is longer? Circle the longer object.



Key



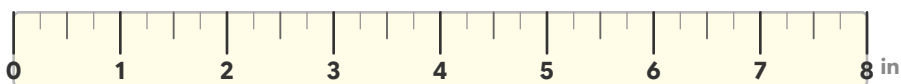
Leaf

The leaf is longer.

Which is longer? Circle the longer object.



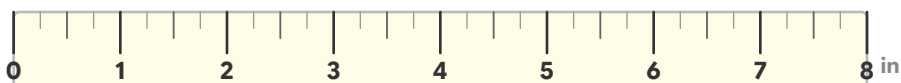
Bone



Crayon

The bone is longer.

Which is longer? Circle the longer object.



Pencil



Ribbon

The ribbon is longer.

