

Read the Measurement (Centi)

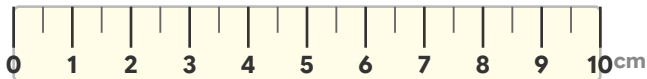
Measure each object and write the answer.

How long is the pencil?



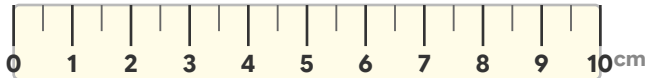
The pencil is _____ centimeters long.

How long is the ribbon?



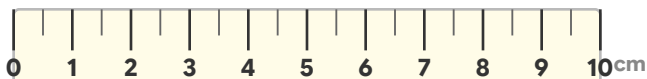
The ribbon is _____ centimeters long.

How long is the eraser?



The eraser is _____ centimeter long.

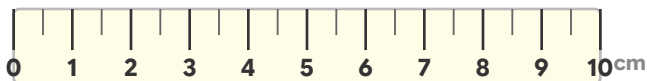
How long is the key?



The key is _____ centimeter long.

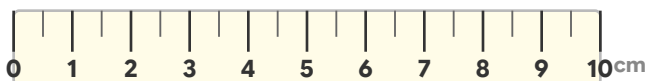
Read the Measurement (Centi

How long is the pencil?



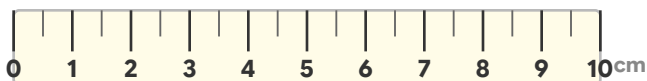
The pencil is 6 centimeters long.

How long is the ribbon?



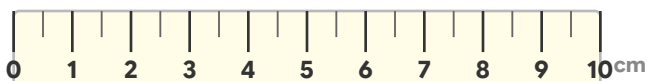
The ribbon is 4 centimeters long.

How long is the eraser?



The eraser is 1 centimeter long.

How long is the key?



The key is 1 centimeter long.