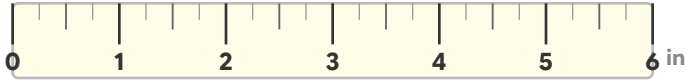


Read the Measurement (Inches)

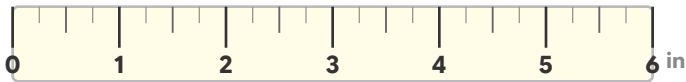
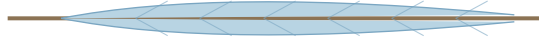
Measure each object and write the answer.

How long is the pencil?



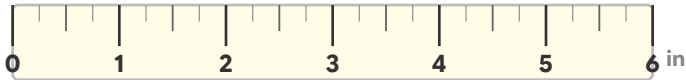
The pencil is _____ inches long.

How long is the feather?



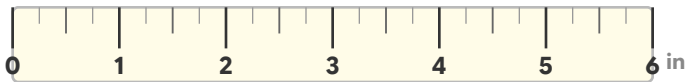
The feather is _____ inches long.

How long is the crayon?



The crayon is _____ inch long.

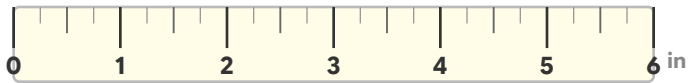
How long is the caterpillar?



The caterpillar is _____ inches long.

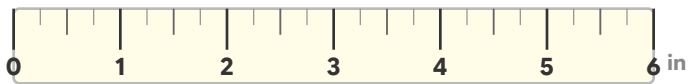
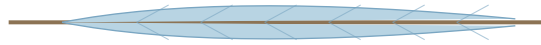
Read the Measurement (Inches)

How long is the pencil?



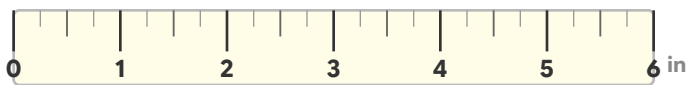
The pencil is 2 inches long.

How long is the feather?



The feather is 5 inches long.

How long is the crayon?



The crayon is 1 inch long.

How long is the caterpillar?



The caterpillar is 3 inches long.