

# Number Line Addition (1-20)

Use the number line to answer each question.

$8 + 4 = \underline{\quad}$



$16 + 2 = \underline{\quad}$



$18 + 2 = \underline{\quad}$



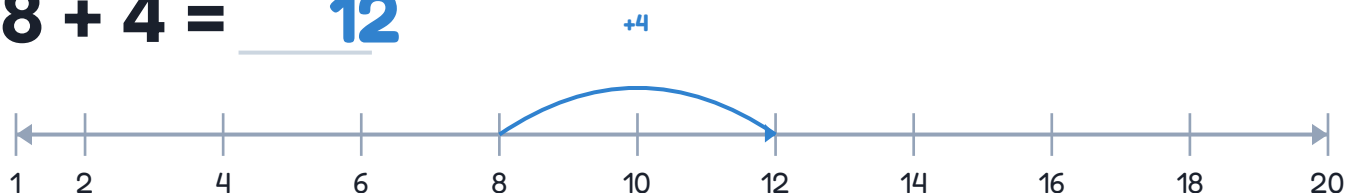
$6 + 8 = \underline{\quad}$



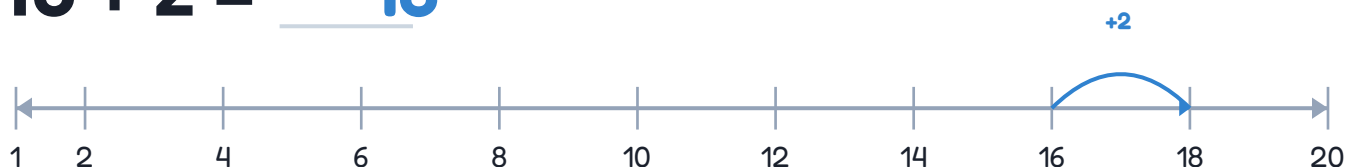
# Number Line Addition (1-20)

Use the number line to answer each question.

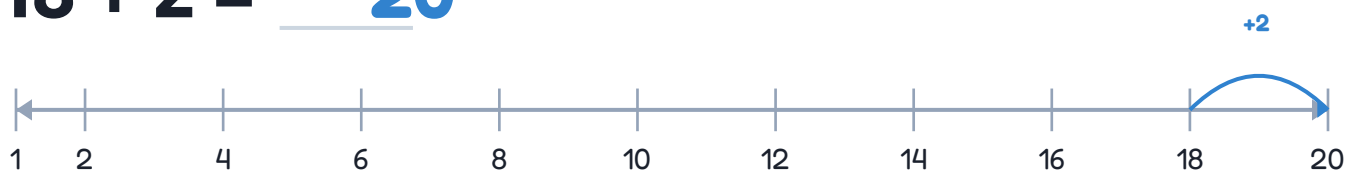
$$8 + 4 = \underline{12}$$



$$16 + 2 = \underline{18}$$



$$18 + 2 = \underline{20}$$



$$6 + 8 = \underline{14}$$

