





# Favorite Fruits

Use the pictograph to answer the questions.

<b>Bananas</b>	
<b>Peaches</b>	
<b>Watermelons</b>	
<b>Strawberries</b>	

**Key: Each  = 5 students**  
(Half picture = 2.5 students)

## Questions:

How many more students picked Bananas than Peaches? \_\_\_\_\_

How many students picked Watermelons? \_\_\_\_\_

Which is the most popular fruit? \_\_\_\_\_

How many students were asked in all? \_\_\_\_\_

# Favorite Fruits

Use the pictograph to answer the questions.



**Key: Each  = 5 students**  
(Half picture = 2.5 students)

## Questions:

How many more students picked Bananas than Peaches? 10

How many students picked Watermelons? 10

Which is the most popular fruit? Bananas

How many students were asked in all? 50