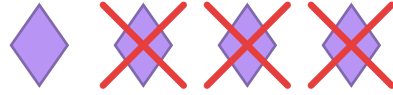
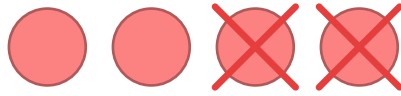


Subtraction with Pictures

Count the pictures and solve each subtraction problem.




$$4 - 3 = \underline{\quad}$$




$$4 - 2 = \underline{\quad}$$



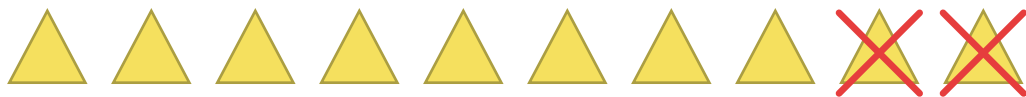
$$3 - 1 = \underline{\quad}$$



$$8 - 4 = \underline{\quad}$$



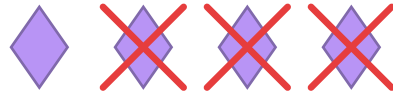
$$6 - 4 = \underline{\quad}$$



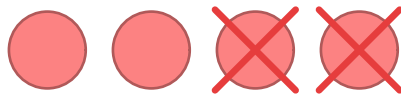
$$10 - 2 = \underline{\quad}$$

Subtraction with Pictures

Count the pictures and solve each subtraction problem.




$$4 - 3 = 1$$



$$4 - 2 = 2$$



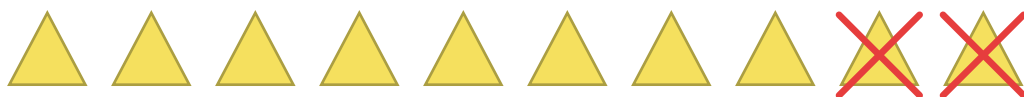
$$3 - 1 = 2$$



$$8 - 4 = 4$$



$$6 - 4 = 2$$



$$10 - 2 = 8$$