


Subtraction with Pictures

Count the pictures and solve each subtraction problem.




$$\underline{\quad} - \underline{\quad} = \underline{\quad}$$



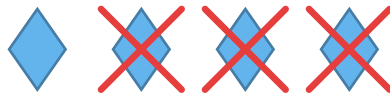
$$\underline{\quad} - \underline{\quad} = \underline{\quad}$$



$$\underline{\quad} - \underline{\quad} = \underline{\quad}$$



$$\underline{\quad} - \underline{\quad} = \underline{\quad}$$



$$\underline{\quad} - \underline{\quad} = \underline{\quad}$$




$$\underline{\quad} - \underline{\quad} = \underline{\quad}$$

Subtraction with Pictures

Count the pictures and solve each subtraction problem.




$$7 - 5 = 2$$



$$14 - 13 = 1$$



$$9 - 4 = 5$$



$$16 - 14 = 2$$



$$4 - 3 = 1$$



$$12 - 7 = 5$$