


Tally Marks

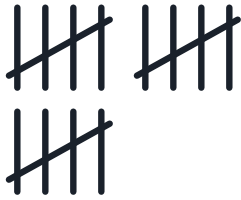
Count the tally marks and write the number.





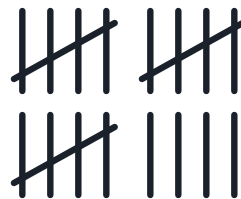












Tally Marks

Count the tally marks and write the number.



7



10



3



18




15



4



1



19