


# Making 5


Find the missing number to make 5.



$$\underline{\quad} + 2 = 5$$




$$\underline{\quad} + 4 = 5$$



$$3 + \underline{\quad} = 5$$



$$\underline{\quad} + 1 = 5$$



$$\underline{\quad} + 4 = 5$$




$$\underline{\quad} + 1 = 5$$

# Making 5



$$3 + 2 = 5$$




$$1 + 4 = 5$$



$$3 + 2 = 5$$



$$4 + 1 = 5$$



$$1 + 4 = 5$$



$$4 + 1 = 5$$